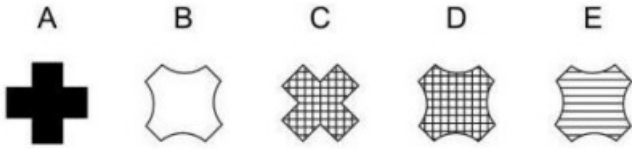

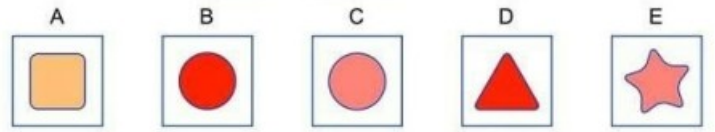
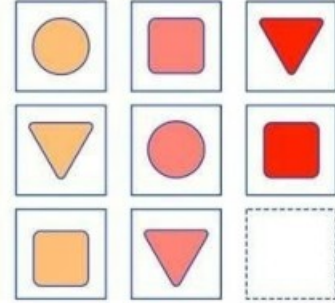


# 1-F Sınıfı Zeka Sorusu Etkinlikleri

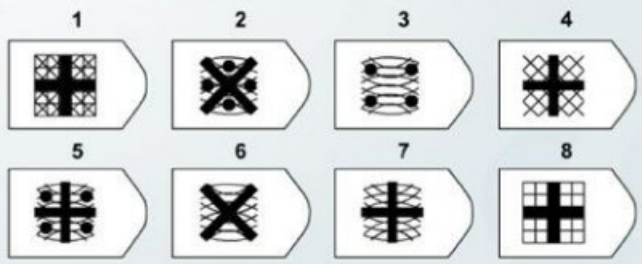
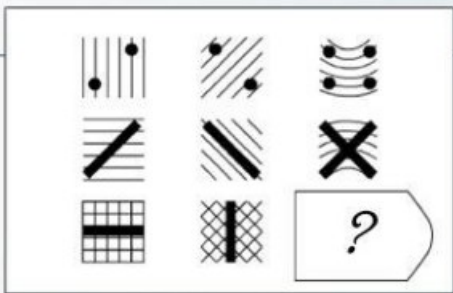
Soru—1



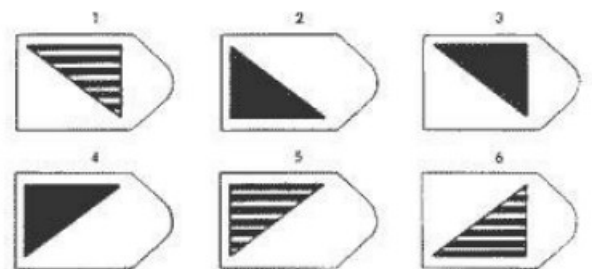
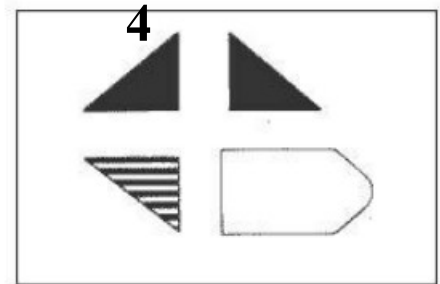
Soru—3



Soru—2




Soru—

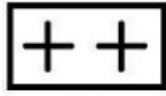


# 1-F Sınıfı Zeka Sorusu Etkinlikleri

## Soru—1



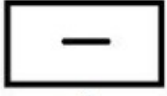
a




b



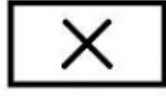
c



d

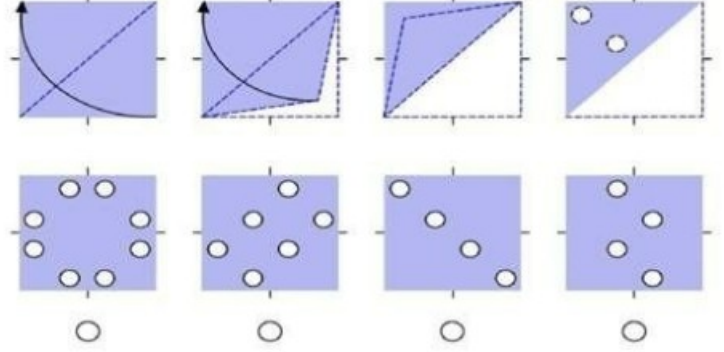


e



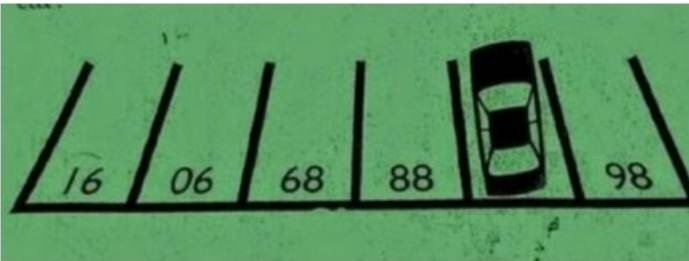
f

## Soru—3



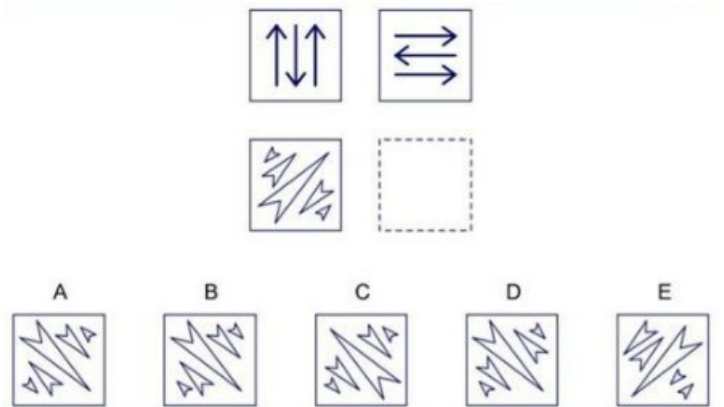
## Soru—2

Arabanın bulunduğu parkın numarası kaçtır?



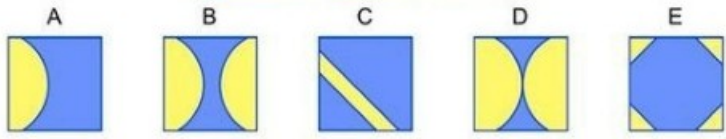
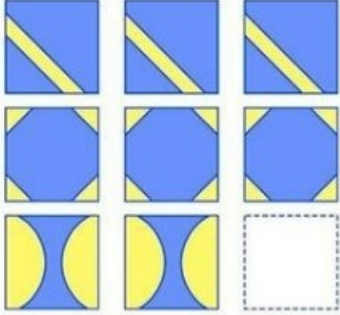
Cevap :

## Soru—4



# 1-F Sınıfı Zeka Sorusu Etkinlikleri

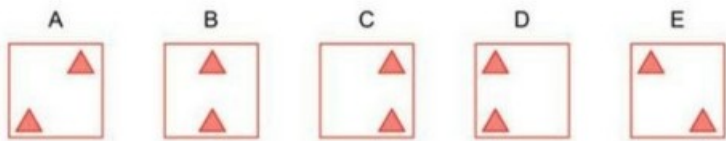
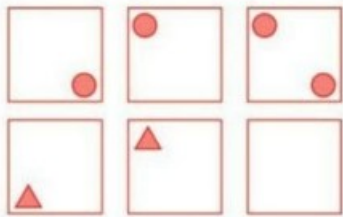
## Soru—1



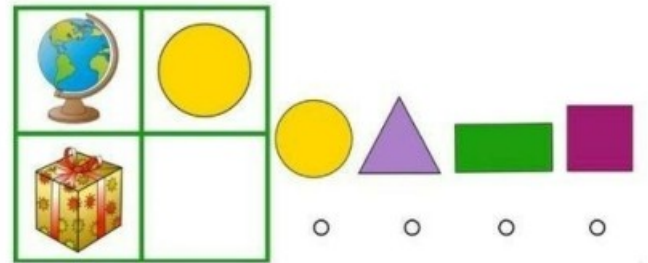
## Soru—3



## Soru—2

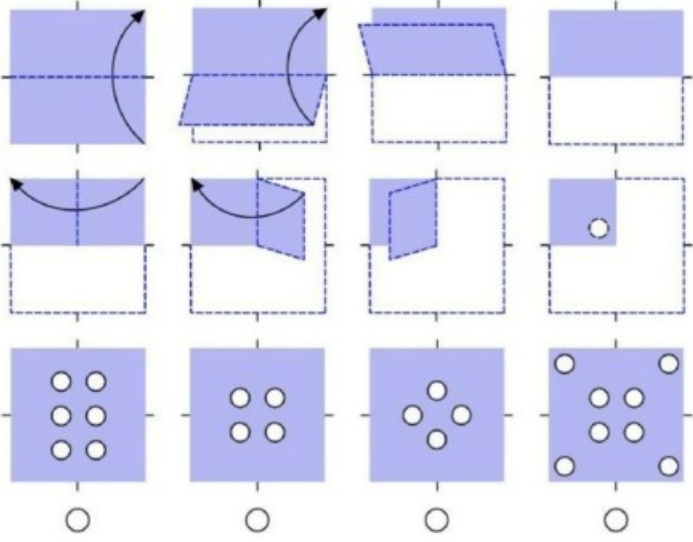


## Soru—4

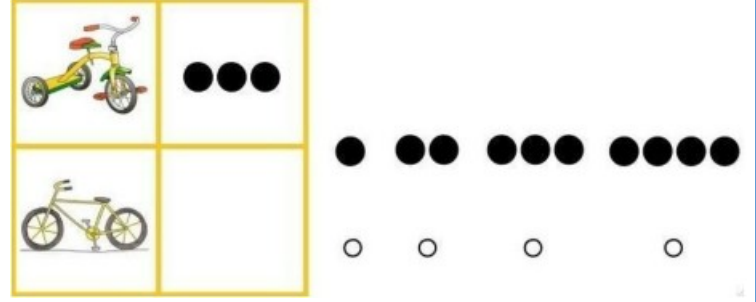


# 1-F Sınıfı Zeka Sorusu Etkinlikleri

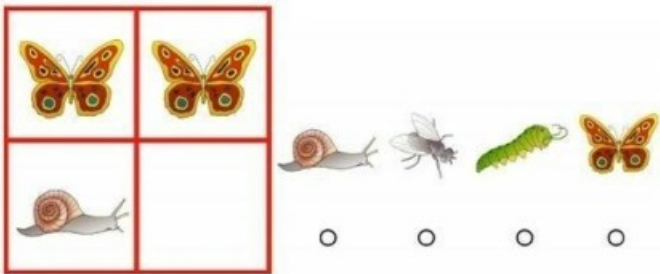
Soru—1



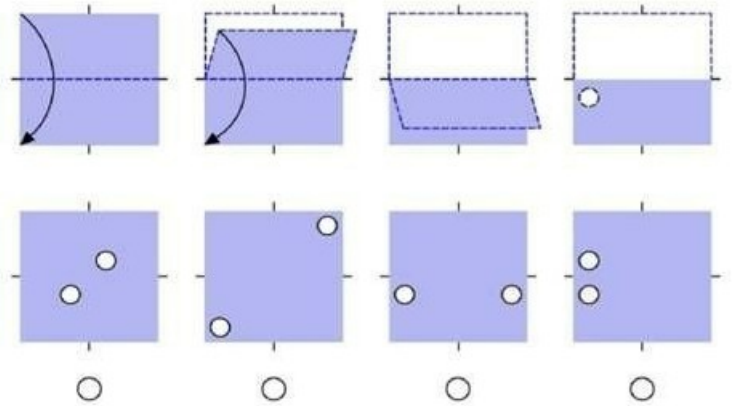
Soru—3



Soru—2



Soru—4



## CEVAP AHAHTARI

<b>SAYFA-1</b>	<b>SAYFA-2</b>	<b>SAYFA-3</b>	<b>SAYFA-4</b>
<i>SORU1-D</i>	<i>SORU1-B</i>	<i>SORU1-B</i>	<i>SORU1-2.SIRADAKİ ŞEKİL</i>
<i>SORU2-2</i>	<i>SORU2-87</i>	<i>SORU2-D</i>	<i>SORU2-SALYANGOZ</i>
<i>SORU3-B</i>	<i>SORU3-3.SIRADAKİ ŞEKİL</i>	<i>SORU3-BİLGİSAYAR</i>	<i>SORU3-2.SIRADAKİ ŞEKİK</i>
<i>SORU4-5</i>	<i>SORU4-D</i>	<i>SORU4-KARE</i>	<i>SORU4-4.SIRADAKİ ŞEKİL</i>

