
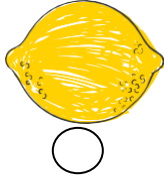
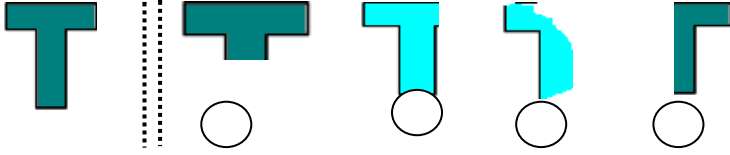
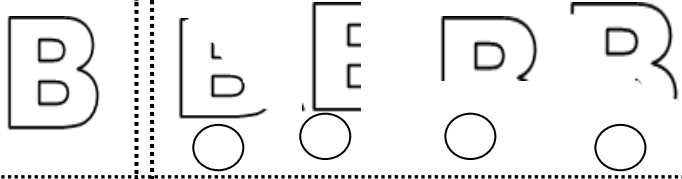


## BÜTÜN YARIM ETKİNLİĞİ


1. Aşağıdaki şekillerin yarısını boyayınız.



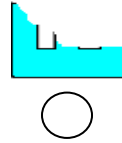
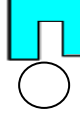
2. Baştaki nesnenin yarısı hangisidir? İşaretleyiniz.




3. Aşağıdakilerden hangisi bütündür?




4.  şeklinin yarısı hangisidir?



5. Aşağıdakilerden hangisi yarımı gösterir?



6.



şeklinin yarısı hangisidir?



7.

Eş yarımaları eşleştirelim.



8.

Aşağıdaki yarım yıldızlardan kaç tane bütün yıldız oluşur?




A) 3

B) 4

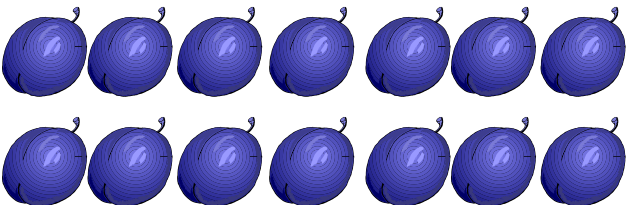
C) 5

9.

12 armudun yarısı kaç armut eder? Çizerek ayırınız.



10. 14 tane eriğin yarısı kaç erik eder?



A) 9

B) 8

C) 7

11. 3 tane bütün karpuz kaç tane yarım karpuz eder?



A) 5

B) 6

C) 7

12. Ablam, 8 tane yarım bisküviyi tabağa koydu. Tabaktaki bisküviler kaç bütün bisküvi eder?

A) 5

B) 4

C) 3

13. 10 bütün limon kaç tane yarım limon eder?


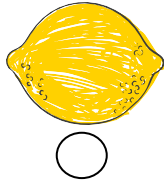
A) 2

B) 5

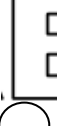
C) 20

## BÜTÜN YARIM ETKİNLİĞİ- CEVAPLAR

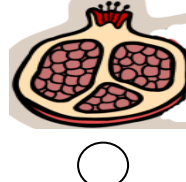

1. Aşağıdaki şekillerin hangisi yarımıdır?



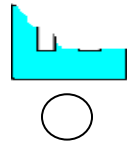
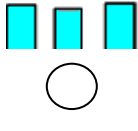
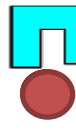
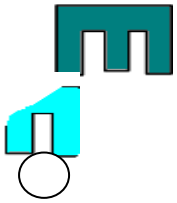
2. Baştaki nesnenin yarısı hangisidir? İşaretleyiniz.




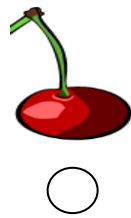
3. Aşağıdakilerden hangisi bütündür?



4. şeklinin yarısı hangisidir?



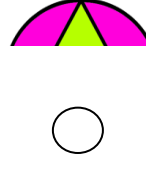
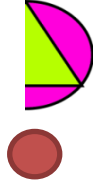
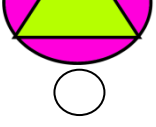
5. Aşağıdakilerden hangisi yarımı gösterir?



6.

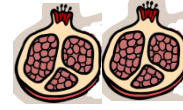


şeklinin yarısı hangisidir?



7.

Eş yarımaları eşleştirelim.



8.

Aşağıdaki yarım yıldızlardan kaç tane bütün yıldız oluşur?



A) 3


B) 4

C) 5


CEVAP: 6 tane yarım 3 bütün eder.

9.

12 armudun yarısı kaç armut eder? Çizerek ayırınız.



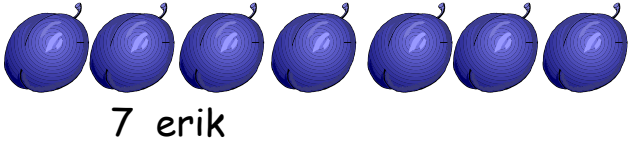
6 armut



6 armut

12 armudun yarısı 6'dır.


10. 14 tane eriğin yarısı kaç erik eder?




A) 9

B) 8

C) 7



11.



3 tane bütün karpuz kaç tane yarım karpuz eder?

A) 5

B) 6

C) 7

12. Ablam, 8 tane yarım bisküviyi tabağa koydu. Tabaktaki bisküviler kaç bütün bisküvi eder?




B) 5

B) 4

C) 3

13. 10 bütün limon kaç tane yarım limon eder?



A) 12

B) 15

C) 20